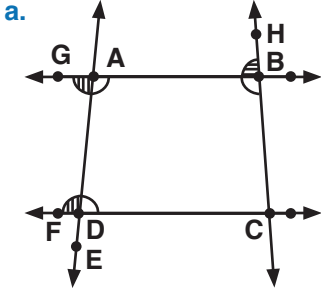
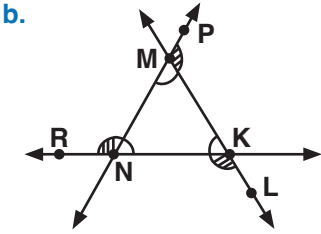


UYGULAMA - 2

1. Aşağıdaki çokgenlerin iç ve dış açılarını boşluklara sembolle yazınız.

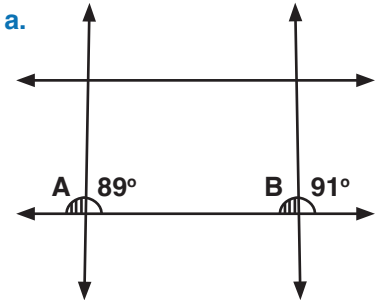


İç Açı	Dış Açı



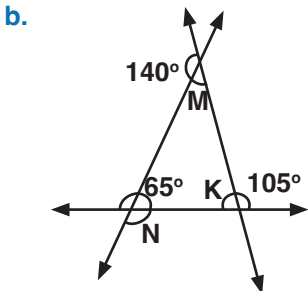
İç Açı	Dış Açı

2. Aşağıda verilmeyen açıları bulunuz.



A =

B =

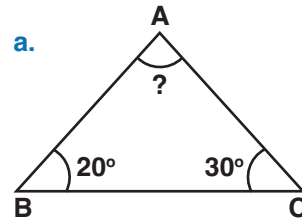


M =

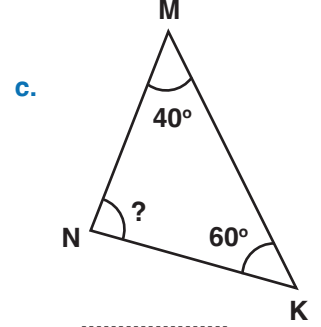
N =

K =

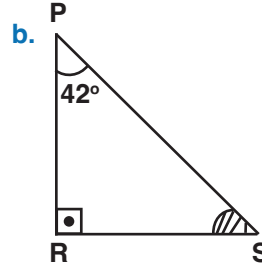
3. Aşağıda verilen üçgenlerin verilmeyen açısını bularak açılara göre isimlendiriniz.



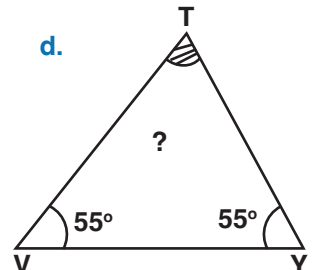
.....



.....



.....



.....

4. Aşağıda kenar uzunlukları verilen üçgenleri kenarlarına göre isimlendiriniz.

a. (5 cm 3 cm 3 cm) :

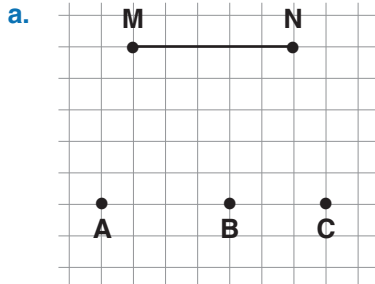
b. (3 cm 4 cm 5 cm) :

c. (17 cm 17 cm 17 cm) :

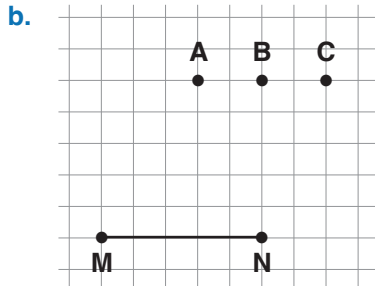
d. (6 cm 8 cm 6 cm) :

UYGULAMA - 2

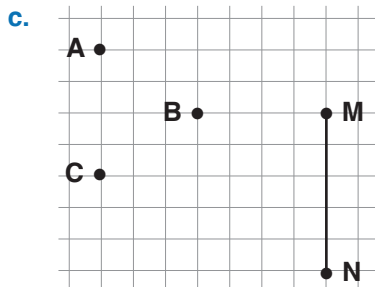
5. Aşağıda verilen [MN]'nin M ve N noktalarını A, B veya C noktalarından biriyle birleştirerek istenilen üçgenleri çiziniz.



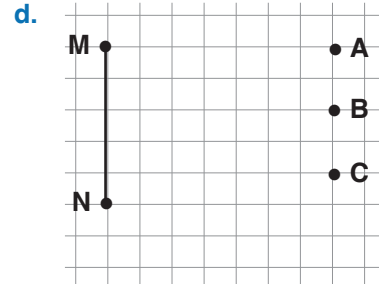
Dar Açılı Üçgen



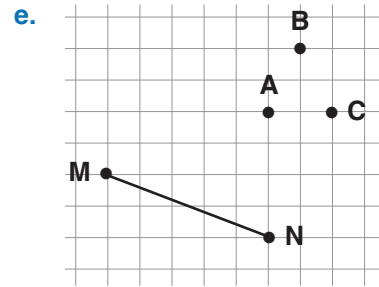
Geniş Açılı Üçgen



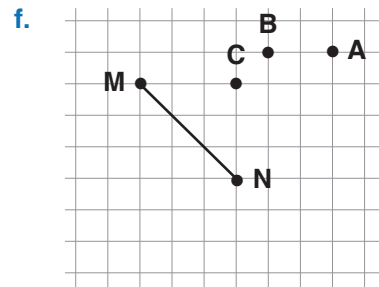
İkiz Kenar Üçgen



Dik Açılı Üçgen



Çeşit Kenar Üçgen



İkiz Kenar Üçgen
Dik Üçgen

www.mavimatematik.com

www.mavimatematik.com



Uygulama - 2'nin cevap anahtarına ulaşmak için karekodu okutunuz.