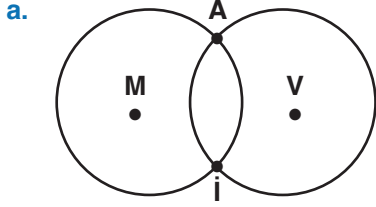


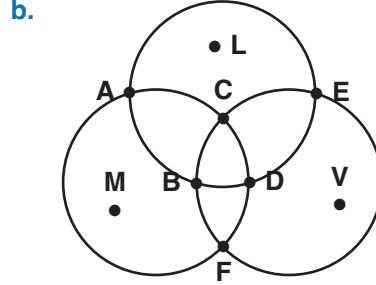
UYGULAMA - 3

1. Aşağıdaki çemberleri kesişim noktalarını ve merkezlerini yazınız.



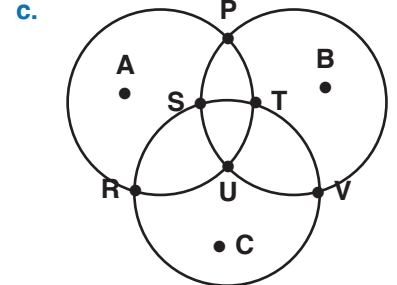
Kesişim Noktaları =

Merkezleri =



Kesişim Noktaları =

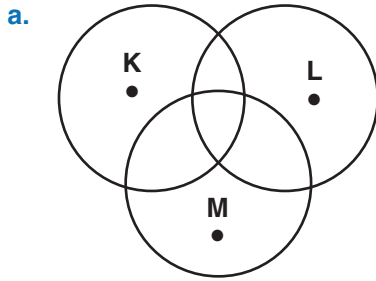
Merkezleri =



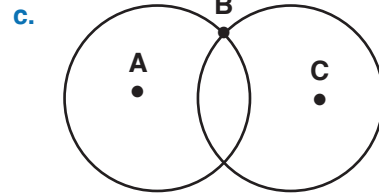
Kesişim Noktaları =

Merkezleri =

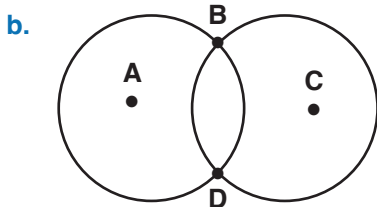
2. Aşağıda isimleri verilen merkez ve kesişim noktalarının tamamını kullanarak çokgen çizip isimlendiriniz.



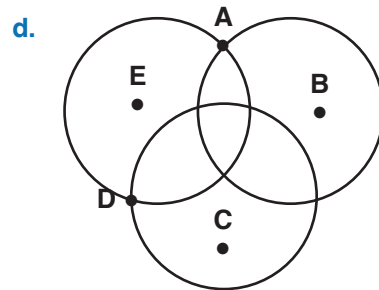
.....



.....



.....

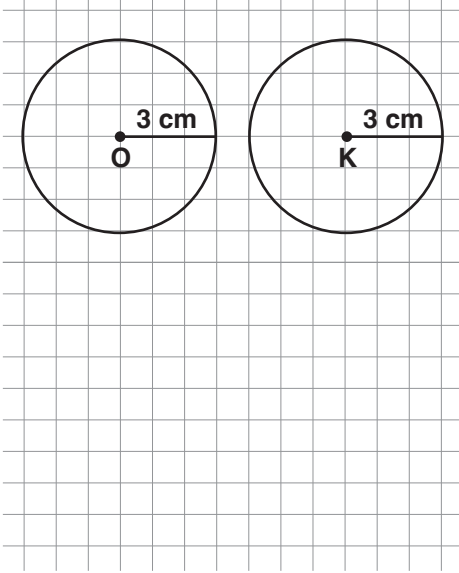


.....

UYGULAMA - 3

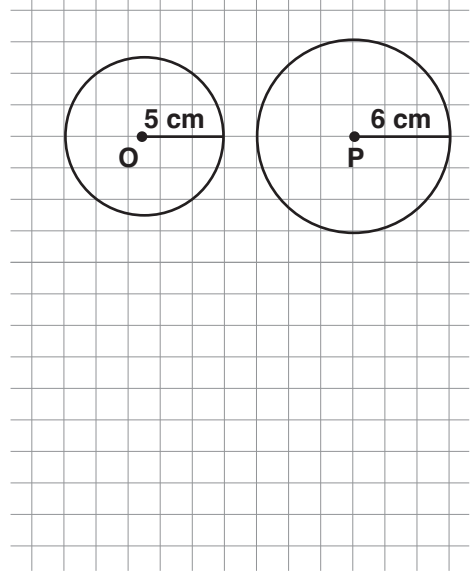
3. Aşağıdaki çember çiftlerini kesiştiren merkez ve kesişme noktalarını kullanarak istenilen üçgenleri oluşturunuz.

a.



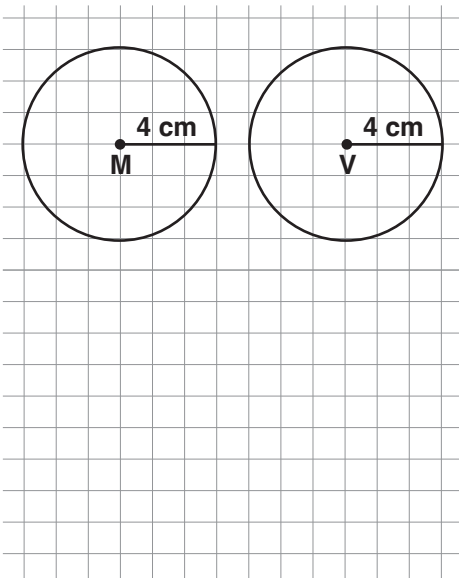
Eşkenar Üçgen

c.



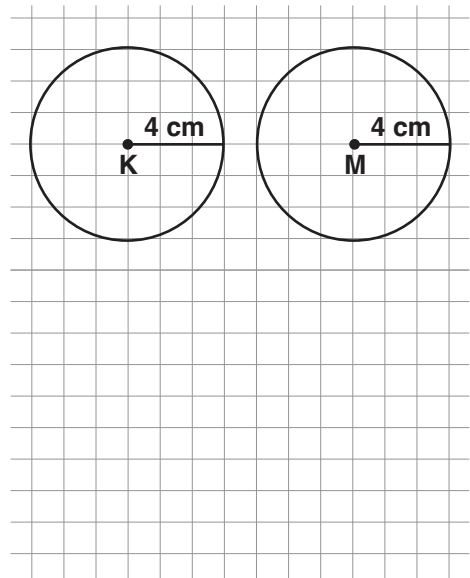
Çeşitkenar Üçgen

b.



İkizkenar Üçgen

d.



Eşkenar Üçgen

www.mavimatematik.com

www.mavimatematik.com



Uygulama - 3'ün cevap anahtarına ulaşmak için karekodu okutunuz.