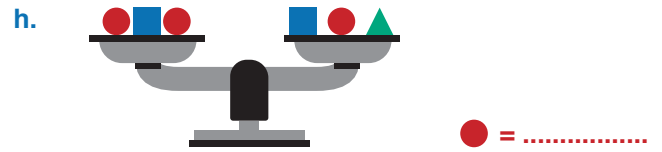
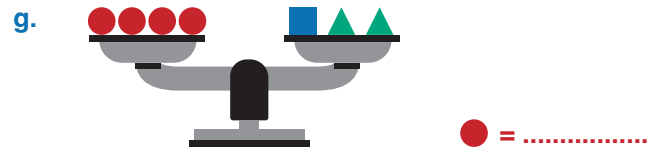
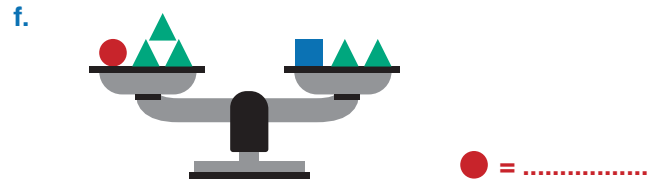
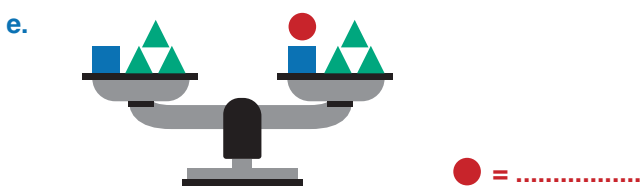
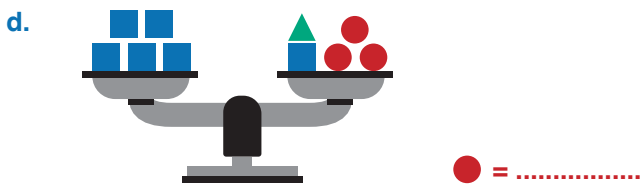
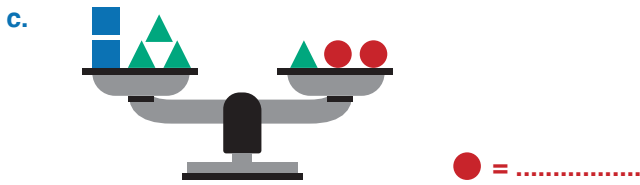
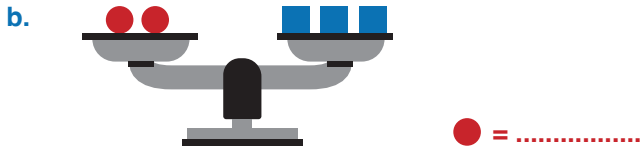


UYGULAMA - 4

1. Aşağıda dengede olan terazilerde “●” (bilinmeyen) sembolün kaç gram olduğunu yazınız?

■ = 8 kg ▲ = 2 kg ● = Bilinmeyen



www.mavimatematik.com

www.mavimatematik.com



Uygulama - 4'ün cevap anahtarına ulaşmak için karekodu okutunuz.