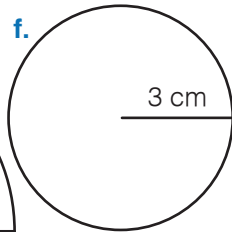
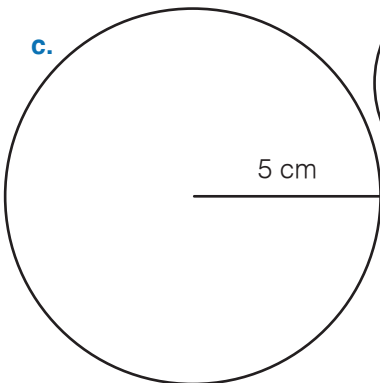
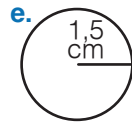
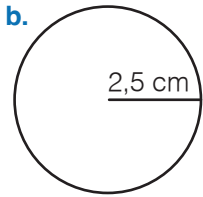
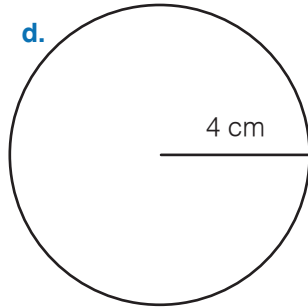
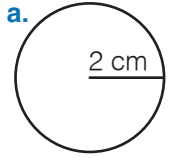


5. SINIF | CEVAP ANAHTARI

Çemberin Elemanları

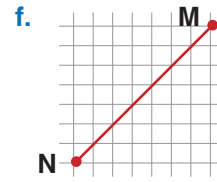
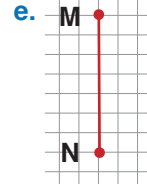
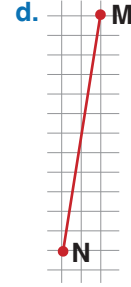
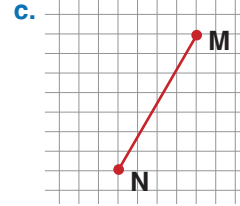
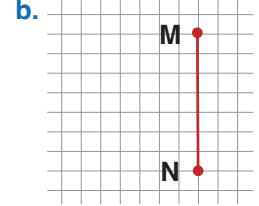
Uygulama - 1

a.	Y	g.	D
b.	Y	h.	D
c.	Y	i.	D
d.	Y	i.	D
e.	D	j.	D
f.	Y		



Eş Doğru Parçaları

Uygulama - 2



www.mavimatematik.com

Doğruların Birbirine Göre Durumu

Uygulama - 3

- a. a ve i b. v ve i c. m ve v d. m ve a
e. a ve v f. a ve t g. v ve t
h. a ve i i. i ve v i. t ve i
j. a ve v k. a ve t k. v ve t

5. SINIF | CEVAP ANAHTARI

Düzlemde İki veya Üç Doğrunun Birbirine Göre Durumuna Bağlı Açılar

Uygulama - 4

1.

D
D
Y
Y
D
Y
D
D
D
D

2.

a. 69°	b. 22°	c. 11°
d. 132°	e. 143°	f. 103°

3.

Açı	Tümleri	Bütünleri
21°	69°	159°
66°	24°	114°
52°	38°	128°
34°	56°	146°

İki Paralel Doğru ve Bir Kesenden Oluşan Açılar

Uygulama - 5

	Eş Açılar	Komşu Açılar	Ters Açılar
a	8 ve 6	6 ve 7	6 ve 8
b	5 ve 7	5 ve 6	7 ve 5
c	4 ve 2	7 ve 8	3 ve 1
d	1 ve 3	5 ve 8	2 ve 4
e		1 ve 2	
f		2 ve 3	
g		3 ve 4	
h		4 ve 1	

Çember

Test - 1

1. B	2. D	3. B	4. C	5. D
6. B	7. C	8. A	9. B	10. D

Doğruların Birbirine Göre Durumları ve Oluşan Açı

Test - 2

1. B	2. C	3. D	4. A	5. A
6. C	7. C	8. B	9. D	10. D