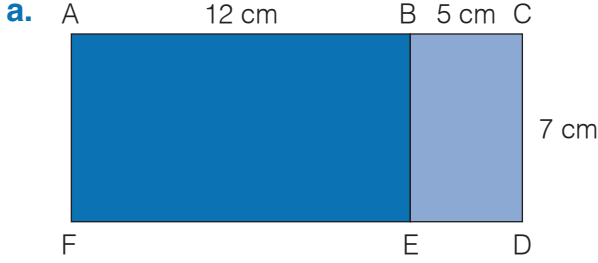
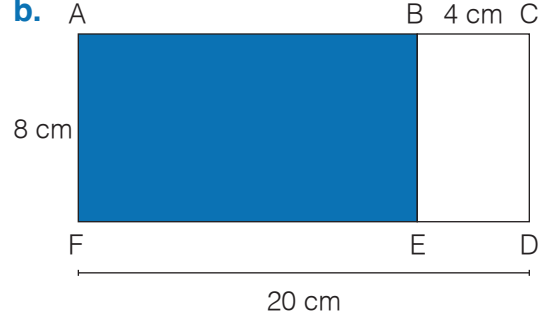


UYGULAMA - 6

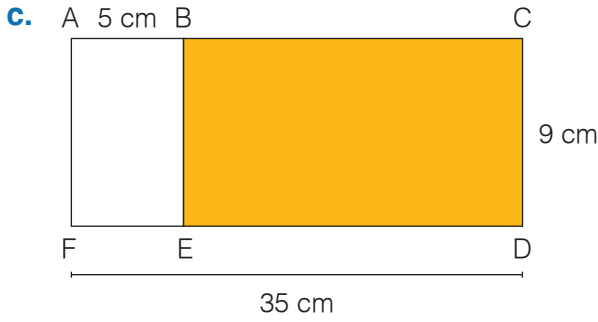
Aşağıdaki dikdörtgenlerde boyalı alanları çarpmanın dağılma özelliğini kullanarak yazınız.



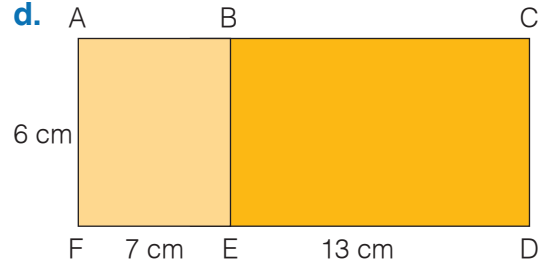
Alan (ACDF) = $7 \cdot (5 + 12)$



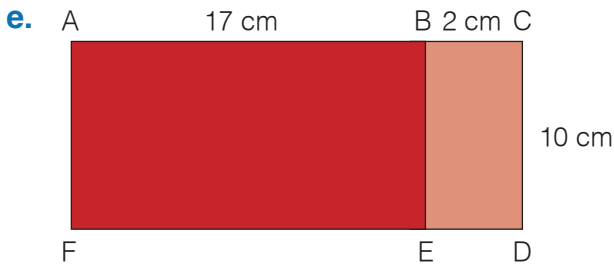
Alan (ABEF) =



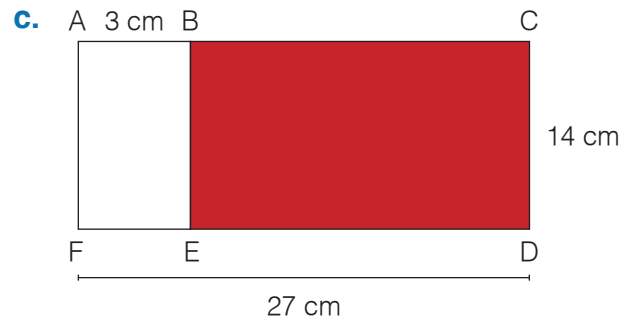
Alan (BCDE) =



Alan (ACDF) =



Alan (ACDF) =



Alan (BCDE) =

www.mavimatematik.com

www.mavimatematik.com



Uygulama - 6'nın cevap anahtarına ulaşmak için karekodu okutunuz.