


UYGULAMA - 4

Aşağıdaki sembollerle gösterilmiş geometrik şekilleri renkli kutuların içine cetvel yardımıyla çizin.

a. [MN]



b. CD



c. [FB



d. GS]



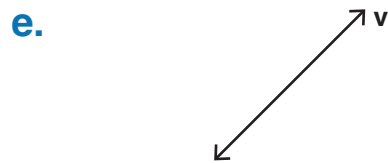
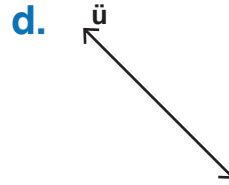


e. \overleftrightarrow{TS}



f. \overline{KM}



Aşağıda verilen doğrulara gönye kullanarak dikmeler çizin.



www.mavimatematik.com

www.mavimatematik.com



Uygulama - 4'ün cevap anahtarına ulaşmak için karekodu okutunuz.