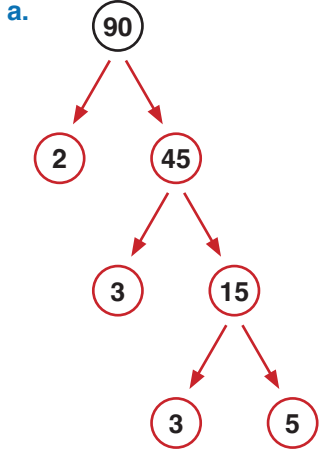
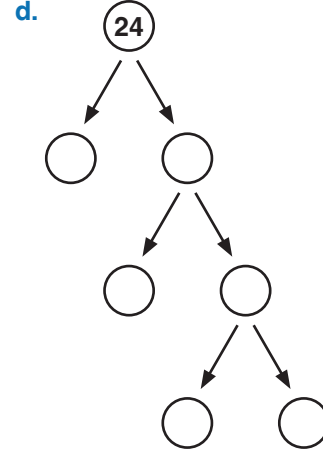


UYGULAMA - 2

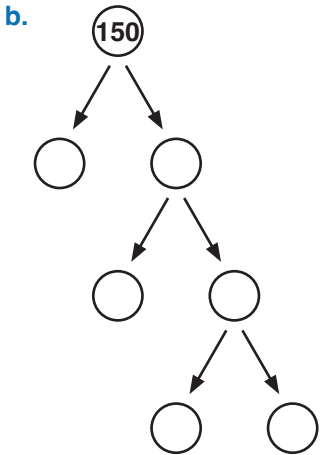
Aşağıdaki tam sayıların asal çarpanlarını çarpan ağacı ile bulalım.



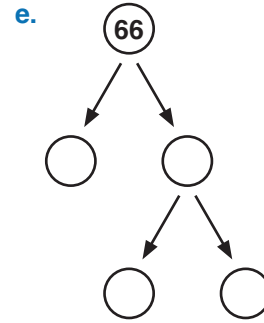
Asal Çarpanları : 2, 3, 5



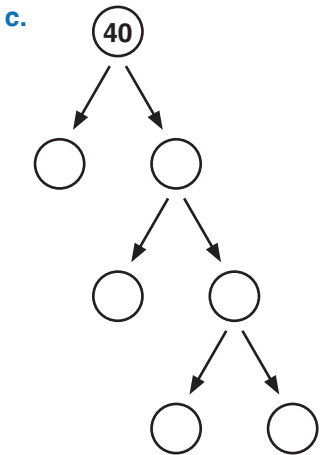
Asal Çarpanları :



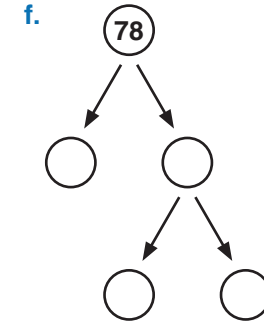
Asal Çarpanları :



Asal Çarpanları :



Asal Çarpanları :



Asal Çarpanları :

www.mavimatematik.com

www.mavimatematik.com



Uygulama - 2'nin cevap anahtarına ulaşmak için karekodu okutunuz.